



INDIAN SCHOOL AL WADI AL KABIR
DEPARTMENT OF MATHEMATICS (2025 – 2026)

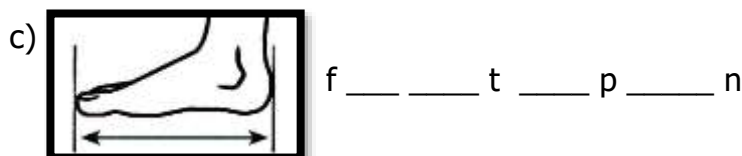
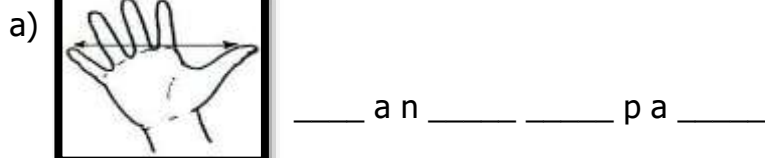
TOPIC: MEASUREMENT

RECALL WORKSHEET

RESOURCE PERSON: Ms. VANESSA TRAVAS


NAME: _____ CLASS: II SEC: _____ DATE: _____

Q1. Look at the pictures given below and unscramble the words to identify the non-standard unit of measurement.



Q2. Do as directed.



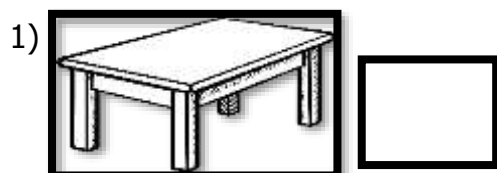
a) How many blocks long is the pencil? Count, colour and write the number of blocks.




_____ blocks.

--	--	--	--	--	--	--	--	--	--

b) Write L (Light) and H (Heavy) against each picture.



c) Write (M) for more or (L) for less for the given containers.



d) Colour the heavier one and circle the lighter one.





INDIAN SCHOOL AL WADI AL KABIR
DEPARTMENT OF MATHEMATICS (2025 – 2026)

TOPIC: MEASUREMENT

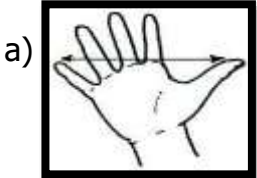
RECALL WORKSHEET

RESOURCE PERSON: Ms. VANESSA TRAVAS

(Answer Key)

NAME: _____ CLASS: II SEC: _____ DATE: _____


Q1. Look at the pictures given below and unscramble the words to identify the non-standard unit of measurement.



h _ a n _ d _ s _ p a n



p _ a _ c _ e




f _ o _ o _ t _ s _ p _ a _ n



c _ u _ b _ i _ t

Q2. Do as directed.

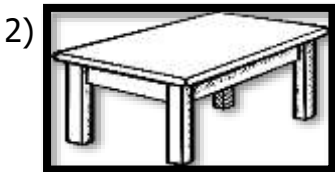
a) How many blocks long is the pencil? Count, colour and write the number of blocks.




7 blocks.




b) Write L (Light) and H (Heavy) against each picture.



H



L



H

c) Write (M) for more or (L) for less for the given containers.



M



L

d) Colour the heavier one and circle the lighter one.

